

Africa

- _____ | _____ 1. About how many miles is it from the capital of Burkina Faso to the capital of Gambia?
- _____ | _____ 2. The continent's two largest lakes are on the borders of what country?
- _____ | _____ 3. What country has the second highest birthrate?
- _____ | _____ 4. What is the predominant economic land use in central Africa?
- _____ | _____ 5. The Niger River Delta is just south of what country?

_____ | _____ 6. The Bab-el-Mandeb strait separates Africa from what other continent?

SAMPLE TEST

Locate the Answer

- _____ | _____ 7. What is the literacy rate of women in Nigeria?
- _____ | _____ 8. Who is Egypt's largest trade partner?
- _____ | _____ 9. What religion do most Africans north of the Sahara follow?

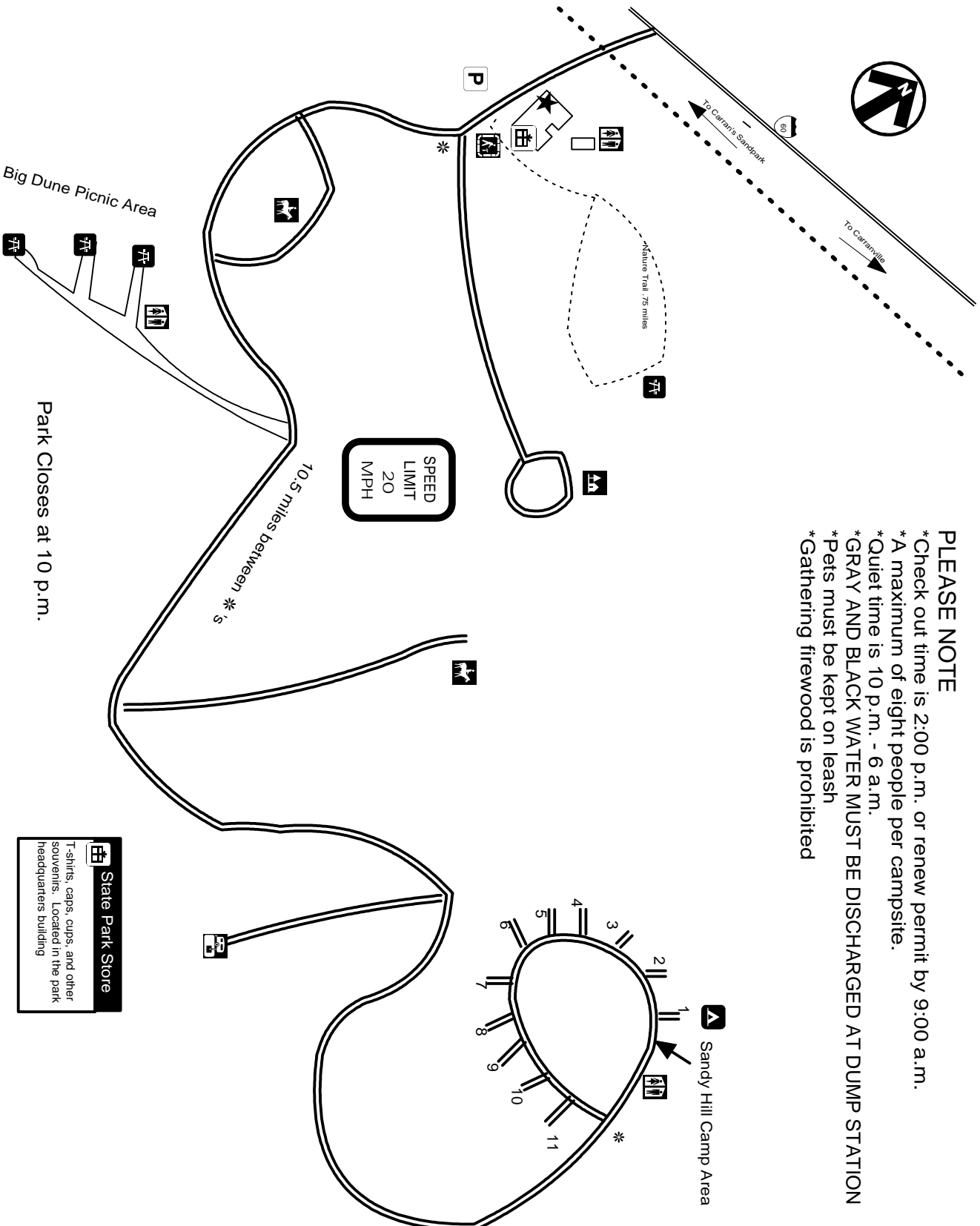
TRUE/FALSE

- _____ | _____ 10. The Sahara covers most of North Africa.
- _____ | _____ 11. The distance between the continent's two largest cities is just under 2,000 miles.
- _____ | _____ 12. Saint Helena is a territory of the United Kingdom.
- _____ | _____ 13. The main energy resource on Madagascar is Uranium.
- _____ | _____ 14. The Great Rift Valley is shrinking the continent by 60 miles in some places.
- _____ | _____ 15. The African continent contains more countries than any other continent.

_____ | **TOTAL POINTS THIS PAGE**

Carran Sandpark State Park

Park Reservations: (713) 555-5454
stateparks.org



- PLEASE NOTE**
- * Check out time is 2:00 p.m. or renew permit by 9:00 a.m.
 - * A maximum of eight people per campsite.
 - * Quiet time is 10 p.m. - 6 a.m.
 - * **GRAY AND BLACK WATER MUST BE DISCHARGED AT DUMP STATION**
 - * Pets must be kept on leash
 - * Gathering firewood is prohibited

LEGEND

- ★ Headquarters
- ⛺ Campsite
- 🍴 Picnic Area
- 👤 Interpretive Trail
- 🗑️ Dump Station
- 🚻 Restroom
- 🐎 Equestrian Sites
- 🅅 Parking
- 🏠 Residence
- 📦 Gift Shop

P.O. Box 3467
Carran, Texas 78409
(690) 392-0987

State Park Store
T-shirts, caps, cups, and other
souvenirs. Located in the park
headquarters building

Park Closes at 10 p.m.

Pts **Answers** - (Write answers in **Answers** column. **Do Not** mark in *Pts. Column.*)

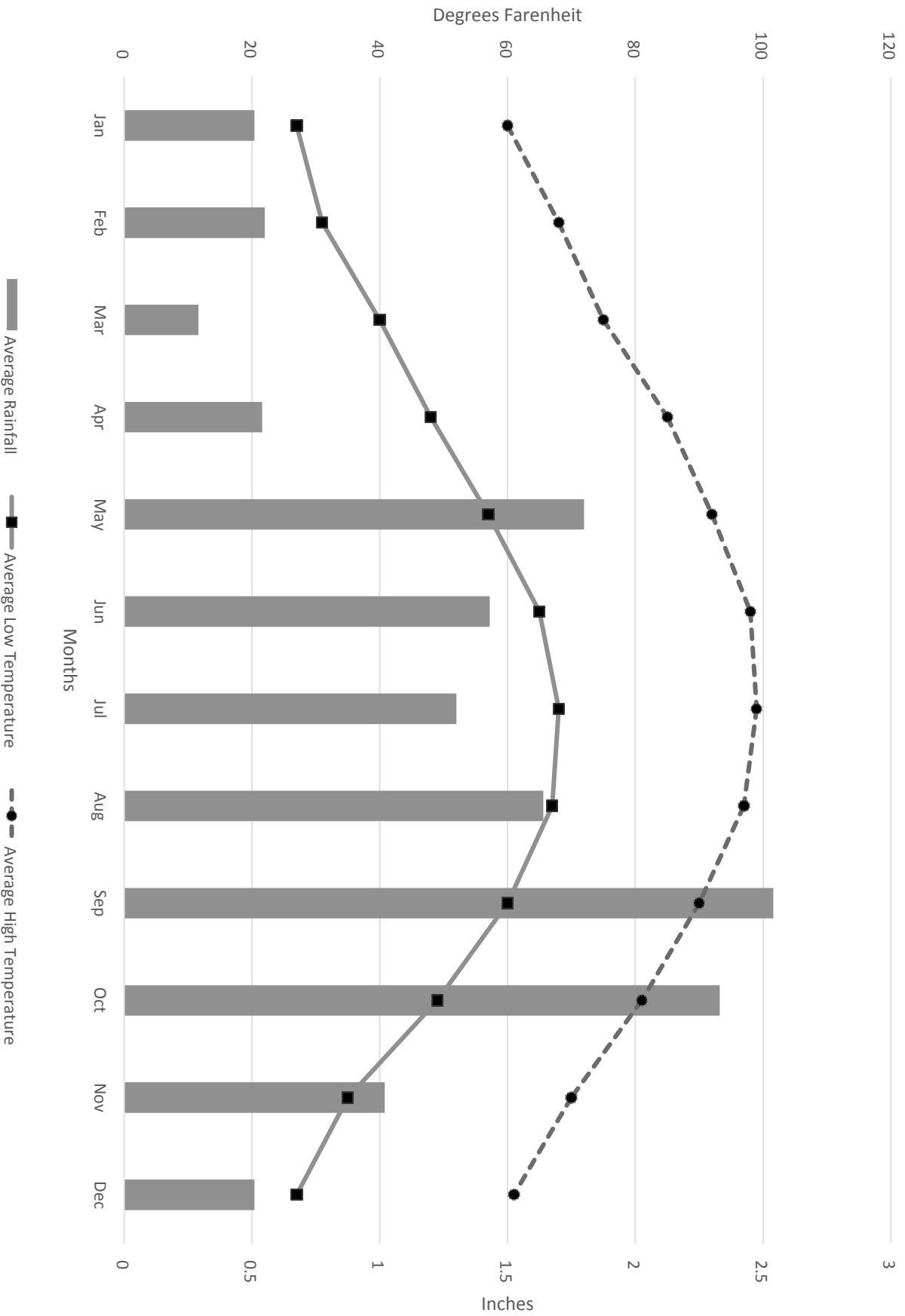
Carran Sandpark State Park

- _____ 16. What does the house and tree symbol represent?
- _____ 17. How many picnic areas are there?
- _____ 18. What is the maximum number of simultaneous campers?
- _____ 19. What map feature is directly north of the headquarters?
a. dump station
b. restroom
c. gift shop
- _____ 20. What is the speed limit in the park?
- _____ 21. How long is "quiet time" in the park?
- _____ 22. List two items that are sold in the state park store.
- _____ 23. Which direction would you travel to go to Carranville?
- _____ 24. Which highway intersects with Park Road?
- _____ 25. How many restroom areas are in the park?
- _____ **TRUE/FALSE**
- _____ 26. The dump station is closer to the headquarters than the campsites.
- _____ 27. The southernmost equestrian site is surrounded by a road.
- _____ 28. It is a little less than 10 miles from the headquarters to the campsites.
- _____ 29. Pets are only allowed off leash at the campsites.
- _____ 30. There is only one location to dump black water.

**SAMPLE TEST
AND KEY**

_____ **TOTAL POINTS THIS PAGE**

Carran State Park Average Rainfall and Temperatures



Pts **Answers** - (Write answers in **Answers** column. **Do Not** mark in *Pts. Column.*)

Carran State Park Average Rainfall and Temperatures

- _____ 31. What information about Carran State Park is depicted in the graph?
- _____ 32. What does the gray bar represent?
- _____ 33. What is the average low temperature in September?
- _____ 34. Which is the best answer to indicate the difference between average low and average high temperature during July?
a. 10 degrees
b. 20 degrees
c. 30 degrees
d. 40 degrees

_____ 35. What three months have a higher/lower average temperature than December's high average temperature?

_____ 36. What month has about the same average rainfall as January?

**SAMPLE TEST
AND KEY**

- _____ 37. What month has the lowest average rainfall?
- _____ 38. What is the difference between the highest and lowest average high temperature?
- _____ 39. What consecutive months have the highest rainfall differential?
- _____ 40. What is the average high temperature in January?

TRUE/FALSE

- _____ 41. In general, the lower the temperature the higher the rainfall.
- _____ 42. January has more rainfall than March.
- _____ 43. The two months with the highest rainfall are in the Spring.
- _____ 44. Average temperatures increase during the year until July.
- _____ 45. The coldest months to visit the park are January and February.

_____ **TOTAL POINTS THIS PAGE**

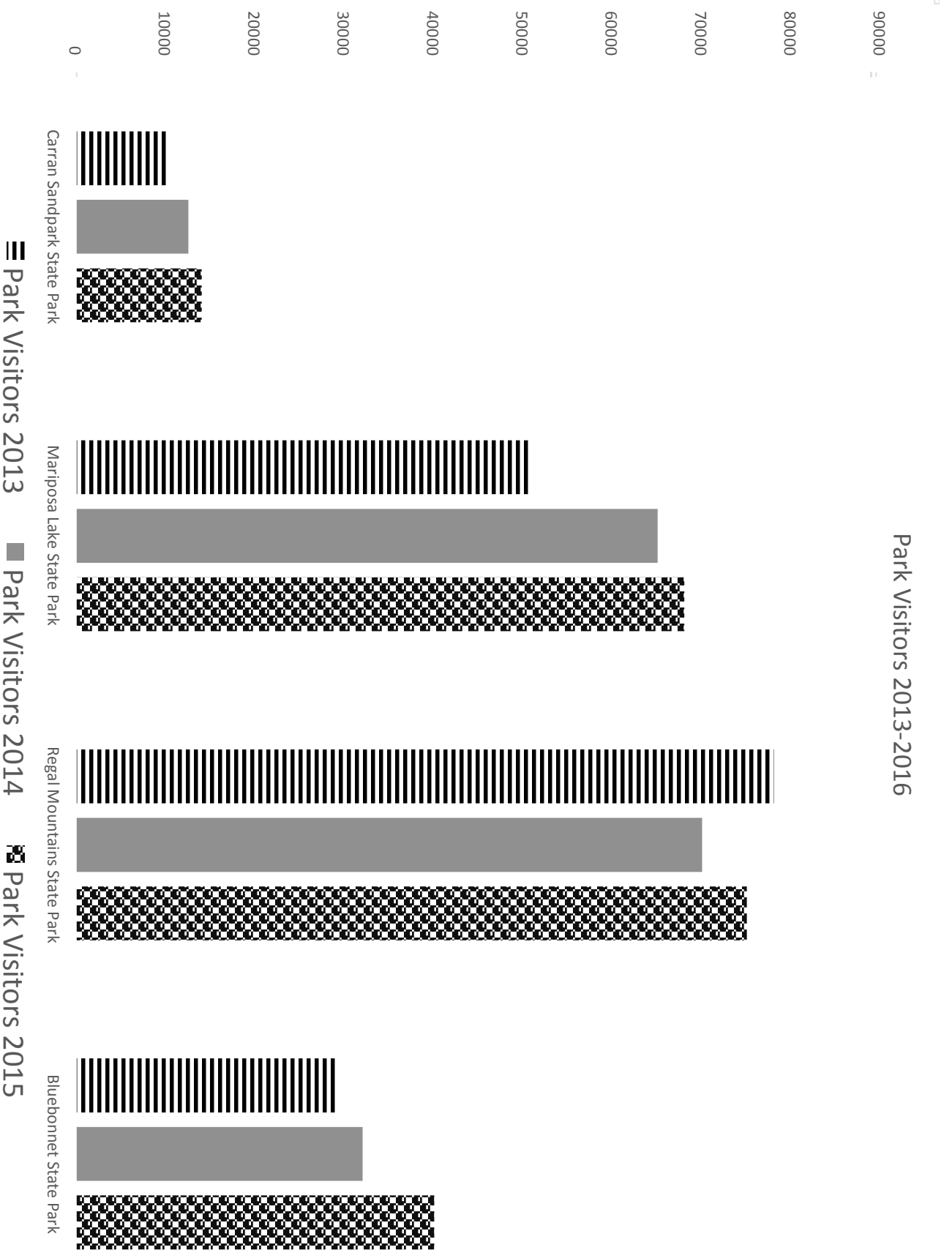
Pts **Answers - (Write answers in Answers column. Do Not mark in Pts. Column.)**

South America

- _____ 46. The region known as Patagonia is located in what two countries?
- _____ 47. The population of Cusco, Peru is
a. over 1,000,000
b. 500,000 to 1,000,000
c. under 500,000
- _____ 48. What is the capital city of Paraguay?
- _____ 49. Juan Fernandez Island is part of what country?
- _____ 50. What is the largest city on the shores of the Amazon River?
- _____ 51. What country is the continent's largest lake located in?
- _____ 52. The highest peak in the continent is near the border of what two countries?
- _____ 53. What country has the largest oil reserve in the Western Hemisphere?
- _____ 54. How many miles is it from one capital of Bolivia to the other Bolivian capital?
- _____ 55. What two country capitals are on shores of the Rio de la Plata?
- TRUE/FALSE**
- _____ 56. The countries with the highest percentage of indigenous populations are generally on the east coast.
- _____ 57. Tierra del Fuego is off the southernmost tip of South America.
- _____ 58. The Guiana Highlands are near the western coast.
- _____ 59. The climate of Bolivia is mainly savanna.
- _____ 60. Two of the three largest cities are in Brazil.

TOTAL POINTS THIS PAGE

Park Visitors 2013-2016



Park Visitors 2013-2016

- _____ 61. What information is in the graph about Bluebonnet State Park?
- _____ 62. What does the solid gray bar represent?
- _____ 63. Which park had a decrease in visitors in 2014 compared to the previous year?
- _____ 64. Which park had the highest increase in visitors over the three years?
- _____ 65. Which state park has had the smallest change in visitors over the three years represented?
- _____ 66. Which year saw the highest number of visitors for all parks combined?
- _____ 67. How many more visitors did Mariposa State Park have in 2015 than in 2014?
- a. about 3,000
b. about 14,000
c. about 7,000
d. about 10,000
- _____ 68. What year saw the greatest jump in visitor numbers at Mariposa State Park?
- _____ 69. About how many more people visited Bluebonnet State Park in 2015 as compared to 2013.
- _____ 70. What is the difference in number of visitors between Carran Sandpark's best year and Regal Mountain's worst year?
- TRUE/FALSE**
- _____ 71. Attendance has tended to increase for parks with each new year.
- _____ 72. You can tell from the graph that the reason for the decrease in visitors at Regal Mountains in 2014 was due to the large increase in rainfall that year.
- _____ 73. Given the trend, Mariposa Lake State Park will probably have a decrease in visitors in 2016.
- _____ 74. In 2015, Bluebonnet State Park had more than four times as many visitors as Carran Sandpark State Park.
- _____ 75. The total for all visitors to all parks in 2013 was over 160,000.

**SAMPLE TEST
AND KEY**

_____ **TOTAL POINTS THIS PAGE**

UIL Maps, Graphs, Charts - ANSWER KEY - 2016-2017 7/8 Fall/Winter

Answer	Qst#	Answer	Qst#	Answer	Qst#
about 1,000 miles	1	Residence	16	average rainfall, average high and low temperatures.	31
		4	17		
Tanzania	2	88	18	Average rainfall	32
Ethiopia	3	b. restroom	19	60	33
subsistence farming	4			c. 30	34
Nigeria	5				
Asia	6	20 mph	20		
		8 hours	21		
61%	7	t-shirts, caps, cups or other souvenirs	22	June, July, August	35
The European Union	8	East	23		
		Highway 60	24	December	36
Islam	9	3	25		
TRUE	10			March	37
		FALSE	26	about 70 degrees	38
FALSE	11	TRUE	27		
TRUE	12	FALSE	28	October and November	39
TRUE	13	FALSE	29		
		TRUE	30	60 degrees	40
FALSE	14			.	
				FALSE	41
TRUE	15			TRUE	42
				FALSE	43
				TRUE	44
				FALSE	45

SAMPLE TEST
AND KEY

UIL Maps, Graphs, Charts - ANSWER KEY - 2016-2017 7/8 Fall/Winter

Answer	Qst#	Answer	Qst#
Argentina and Chile	46	number of park visitors 2013-2016	61
c.	47	park visitors for 2014	62
		Regal Mountain State Park	63
Asuncion	48	Mariposa Lake State Park	64
Chile	49	Carran Sandpark	65
Manaus	50		
Venezuela	51	2015	66
Argentina and Chile.	52	about 3,000	67
Venezuela	53		
about 250 miles	54		
Montevideo, Uruguay and Buenos Aires, Argentina	55	2014	68
FALSE	56	about 11,000	69
TRUE	57	About 56,000	70
FALSE	58		
TRUE	59	TRUE	71
TRUE	60	FALSE	72
		FALSE	73
		FALSE	74
		TRUE	75

SAMPLE TEST
AND KEY